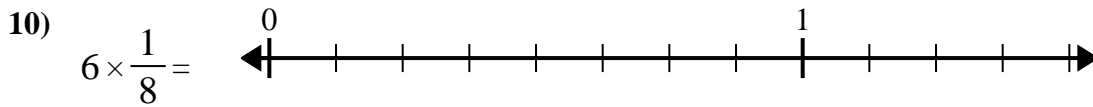
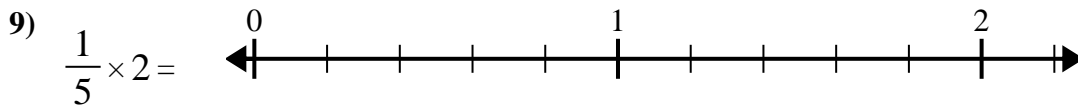
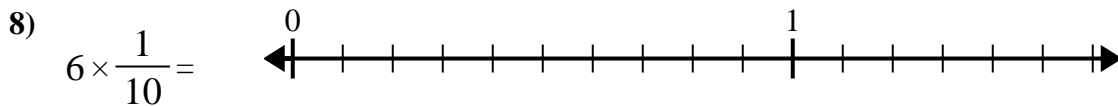
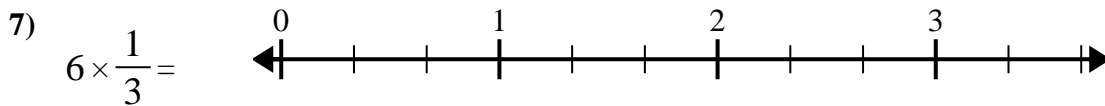
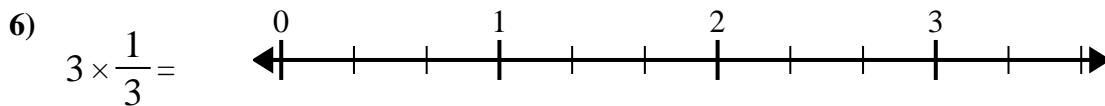
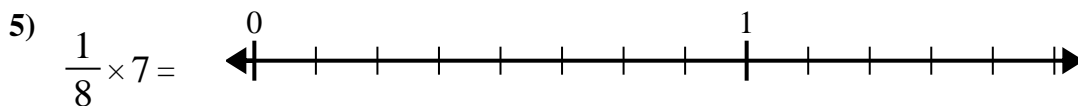
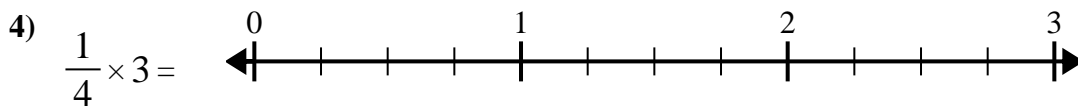
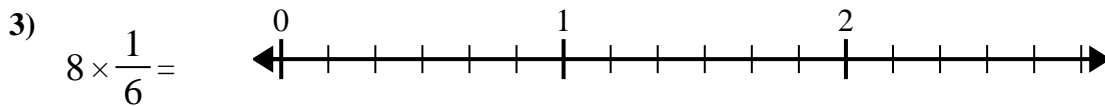
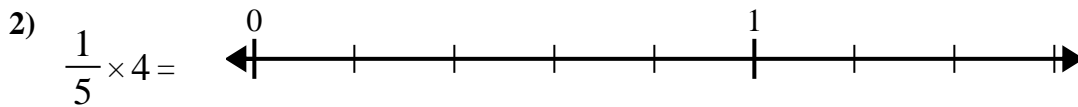
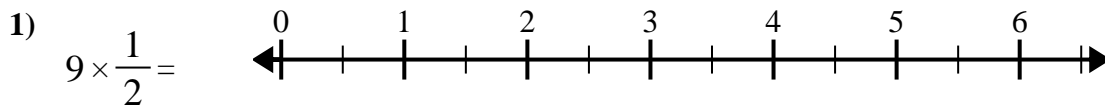




Use the numberline to solve.

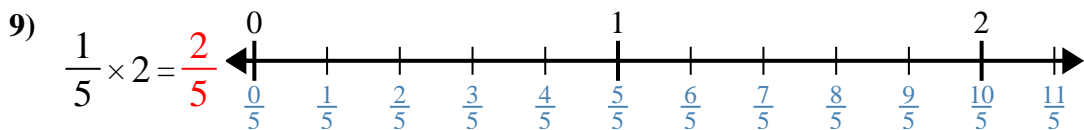
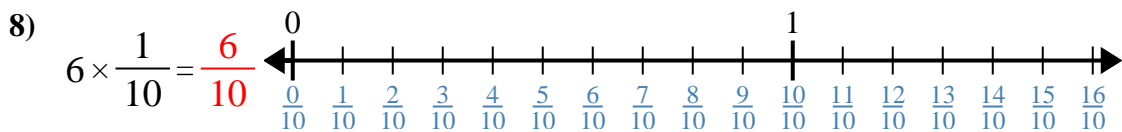
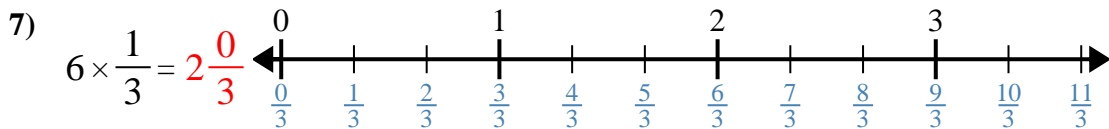
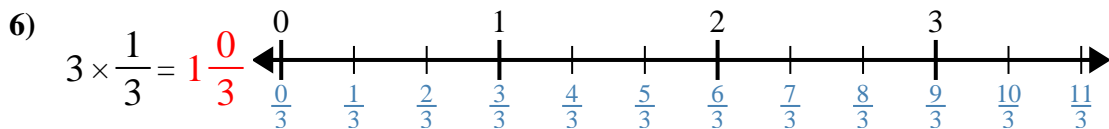
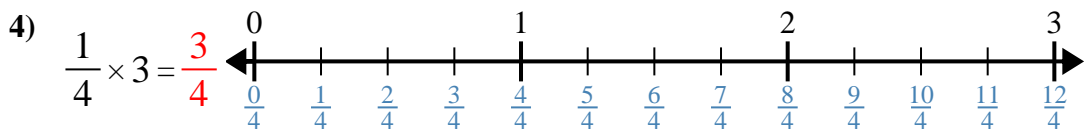
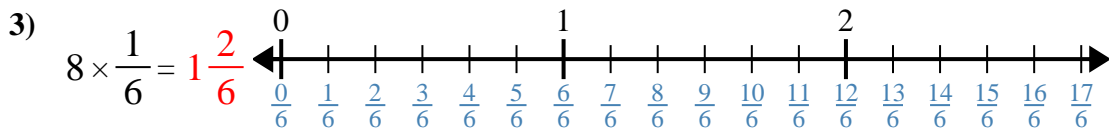
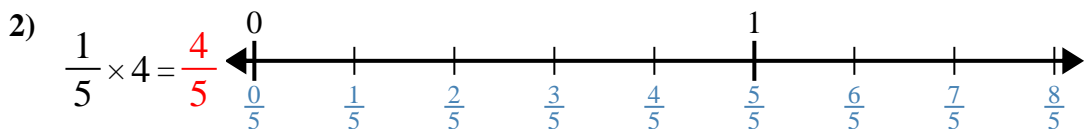
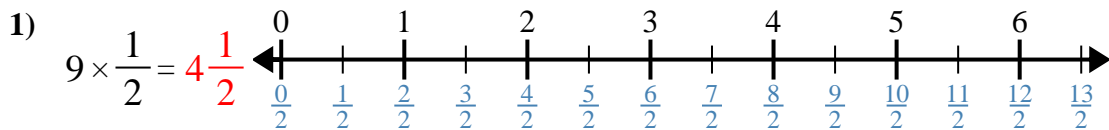


**Answers**

1. \_\_\_\_\_
2. \_\_\_\_\_
3. \_\_\_\_\_
4. \_\_\_\_\_
5. \_\_\_\_\_
6. \_\_\_\_\_
7. \_\_\_\_\_
8. \_\_\_\_\_
9. \_\_\_\_\_
10. \_\_\_\_\_



Use the numberline to solve.



Answers

1.  $4\frac{1}{2}$

2.  $\frac{4}{5}$

3.  $1\frac{2}{6}$

4.  $\frac{3}{4}$

5.  $\frac{7}{8}$

6.  $1\frac{0}{3}$

7.  $2\frac{0}{3}$

8.  $\frac{6}{10}$

9.  $\frac{2}{5}$

10.  $\frac{6}{8}$



Use the numberline to solve.

**Answers**

$1\frac{2}{6}$

$4\frac{1}{2}$

$\frac{4}{5}$

$2\frac{0}{3}$

$\frac{3}{4}$

$1\frac{0}{3}$

$\frac{6}{8}$

$\frac{2}{5}$

$\frac{6}{10}$

$\frac{7}{8}$

1)

1. \_\_\_\_\_

2)

2. \_\_\_\_\_

3)

3. \_\_\_\_\_

4)

4. \_\_\_\_\_

5)

5. \_\_\_\_\_

6)

6. \_\_\_\_\_

7)

7. \_\_\_\_\_

8)

8. \_\_\_\_\_

9)

9. \_\_\_\_\_

10)

10. \_\_\_\_\_